

Where To Download Skills Practice 3 1 Answers

Skills Practice 3 1 Answers

Right here, we have countless ebook **skills practice 3 1 answers** and collections to check out. We additionally meet the expense of variant types and with type of the books to browse. The usual book, fiction, history, novel, scientific research, as capably as various supplementary sorts of books are readily open here.

As this skills practice 3 1 answers, it ends in the works creature one of the favored books skills

Where To Download Skills Practice 3 1 Answers

practice 3 1 answers
collections that we have.
This is why you remain in
the best website to look the
amazing ebook to have.

*Being a Writer - Skills
Practice Book - Lessons 1-3*






self management skills and
basic ict skills practice
questions | MCQ | Revision
for Periodic Test 1 ENGLISH
B1 TEST LISTENING SKILLS
PRACTICE Test 1 with answer
~~SPANISH LISTENING PRACTICE |~~
~~30 Minutes of Spanish~~
~~Listening Practice |~~
~~NOTILOCA #1 Cambridge IELTS~~
~~12 Test 1 Listening Test~~
~~with Answers | Most recent~~
~~IELTS Listening Test 2020~~
IELTS Reading: Top 10 Tips

Where To Download Skills Practice 3 1 Answers

~~ENGLISH B1 TEST LISTENING SKILLS PRACTICE Test 1 with answer~~

English listening skills practice Vol.1 (slow/normal speed)

Functional Skills MATHS Level 2 Exam Sample (City \u0026 Guilds Reformed Exam 2020)

English listening skills practice Vol.2 (slow/normal speed) *McGraw Hill Chapter 1 Lesson 3 Rates Skills Practice Functional Skills MATHS Level 1 Exam Sample (City \u0026 Guilds Reformed Exam 2020) Learn English while you SLEEP - Fast vocabulary increase -* 
-    
English Conversation

Where To Download Skills Practice 3 1 Answers

*Practice Easy To Speak
English Fluently - Daily
English Conversation The 500
common long phrases in
English - Volume 1* ~~Listening
Exercise: Easy English
Lesson - Level B~~

42 Minutes of Intermediate
English Listening
Comprehension ~~Everyday
English Conversations Daily
English Conversation
Practice | Listening and
Speaking | Questions and
Answers | English 4K
Práctica de habilidades de
escucha de inglés 1
(velocidad lenta/normal)~~

How to Answer Any Question
in English ~~English Listening
Practice || English
Conversation || Slow and~~

Where To Download Skills Practice 3 1 Answers

~~Easy English Lesson~~

2 Hours of English

Conversation Practice -

Improve Speaking Skills

Reading Comprehension

Exercise with answers -

Level A Easy English Lesson

IELTS LISTENING PRACTICE

TEST 2020 WITH ANSWERS |

16.12.2020 Functional Skills

English Level 2 Reading

sample 1 answers ~~IELTS~~

~~Speaking Mock Test Band 8~~

~~Evaluate 129 Trigonometric~~

~~Expressions | Skills~~

~~Practice Worksheet French~~

~~listening skills practice~~

~~Vol.2 (slow/normal speed)~~

~~English Listening Practice~~

~~Level 1 | Listening English~~

~~Practice for Beginners in 3~~

~~Hours Skills Practice 3 1~~

Where To Download Skills Practice 3 1 Answers

Answers

3-1 Skills Practice Graphing Linear Equations no yes; $3x + y = 2$ yes; $5x - y = -4$ yes; $2x - y = -5$ yes; $6x - 7$ no yes; $y = 4$ yes; $x + 3$ 1 yes; $y = 2$ x-intercept: 2, x-intercept: 4, x-intercept: 2, y-intercept: -2 y-intercept: 4 y-intercept: 4
Answers (Lesson 3-1)

Answers (Anticipation Guide and Lesson 3-1)

Answers (Lesson 3-1) A1-A19
A2-03-873973 5/22/06 8:25 AM
Page A1. Chapter 3 A2
Glencoe Algebra 2 Chapter 3
6 ... Skills Practice
Solving Systems of Equations
By Graphing Solve each
system of equations by

Where To Download Skills Practice 3 1 Answers

graphing. 1. $x = 2$ 2. $y = 3$ $x = 6$
3. $y = 4$ $3x + y = 0$ $(2, 0)$ $y = 2$ $x = 4$ $(2, 0)$ $y = x + 1$ $(2, 2, -2)$ 2
4. $y = 4$ $x = 5$ 5. $y = 2$ $x = 2$ 6. $y = x$ $y = x + 2$

Answers (Lesson 3-1)

Chapter 3 7 Glencoe Algebra 2 3-1 Skills Practice
Solving Systems of Equations
Graph each system of equations and describe it as consistent and independent, consistent and dependent, or inconsistent. 1. $y = -3x$ 2. $y = x - 5$ 3. $2x - 5y = 10$ $y = -3x + 2$ $-2x + 2y = -10$ 3+ $y = 15$ x Solve each system of equations. 4. $-r + t = 5$ 5. $2x - y = -5$ 6. $x - 3y = -12$ $-2r + t = 4$ $4x + y = 2$ $2x + y = 11$ 7. $2p - 3r = 6$ 8.

Where To Download Skills Practice 3 1 Answers

$$6w - 8z = 16 \quad 9. \quad c + d = 6$$

NAME DATE PERIOD 3-1 Skills Practice - CHISD

Chapter 3 7 Glencoe Geometry Skills Practice Parallel

Lines and Transversals ...

3-1 High Street Bay Street

Low Street Georgia John

Phillip High Street Bay

Street Low Street Georgia

John Connor Quincy Phillip

They are parallel. The lines representing floors A, B, and C are all parallel, and

NAME DATE PERIOD 3-1 Skills Practice - Ms. Casillas

Example 3. A. BUS STATION.

The driveways at a bus station are shown. Identify the transversal connecting

Where To Download Skills Practice 3 1 Answers

1. and 2. Then classify the relationship between the pair of angles. Answer: The transversal connecting 1 and 2 is line v . These are corresponding angles.

3-1 Parallel Lines and Transversals

314 Chapter 3 Skills

Practice 3 Lesson 3.2 Skills

Practice page 2 4. A bakery sells muffins for \$1.25 each and scones for \$1.75 each.

Write an expression that represents the total amount the bakery can earn selling muffins and scones. x 5 muffins y 5 scones $1.25x$ $1.75y$ 5.

Lesson 3.2 Skills Practice

Where To Download Skills Practice 3 1 Answers

Answers - 12/2020

1 3 Skills Practice Solving Equations Answers Glencoe Algebra 2 Tessshlo. Lesson 2 Homework Practice Solve One Step Equations. Glencoe Algebra 2 3 1 Skills Practice Solving Systems Of Equations Tessshlo. Chp 2 Sg Key. Inequalities Algebra 1 Worksheet Printable Worksheets Solving Equations.

1 3 Skills Practice Solving Equations Answer Key Algebra 2 ...

1-3 Squares and Square Roots3 1-4 Order of Operations ... Answer these questions about the four-step problem-solving plan.

Where To Download Skills Practice 3 1 Answers

1. During which step do you ask if your answer makes sense? 2. ... Chapter 1 3 Course 2 Skills Practice Squares and Square Roots

Skills Practice Workbook
Chapter 3 13 Glencoe
Geometry Skills Practice
Angles and Parallel Lines In
the figure, $m \angle 2 = 70$. Find
the measure of each angle.
1. $\angle 3$ 2. $\angle 5$ 3. $\angle 8$ 4. $\angle 1$
5. $\angle 4$ 6. $\angle 6$ In the figure,
 $m \angle 7 = 100$. Find the
measure of each angle. 7. \angle
9 8. $\angle 6$ 9. $\angle 8$ 10. $\angle 2$ 11.
 $\angle 5$ 12. $\angle 11$ In the figure,
 $m \angle 3 = 75$ and $m \dots$

*Answers (Lesson 3-1 and
Lesson 3-2) - AdamsAmity*

Where To Download Skills Practice 3 1 Answers

www.sigma-network.ac.uk
Numeracy Professional Skills
Test 1 - Answers. Mark
Scheme . Mental Arithmetic
Section . Question Number
Correct Answer (1 mark) Also
Accept (1 mark) Do Not
Accept (0 marks) 1 75.0 2 or
. 200.0 200.000 3 6.0 4 5 :
13:0 1:00

*Numeracy Professional Skills
Practice Test 1 - Answers*
-3) 1 Write an equation in
point-slope form of the line
with slope $-$ that contains
(3, 8). 2. Write an equation
in slope-intercept form of
the line with slope and y-
intercept of -2 . 3 Write an
equation in slope-intercept
form of the line that

Where To Download Skills Practice 3 1 Answers

contains $(-1, 7)$ and $(3, -9)$. 4. A bottled water company charges \$8 per month for a water

Oak Park Unified School

District / Overview

Skills Practice Angles and Parallel Lines DATE PERIOD

12 34 78 6 3-2 In the figure, $m\angle 2 =$ In the figure, $m = 11$. $\angle 5$ In the figure, $m\angle 3 =$ of each angle. 13. $\angle 2$ 15. $\angle 7$ 17. $\angle L$ 14 70. Find the measure of each angle. 2. 7.5 100. 10 113 12 IIS u Find the measure of each angle. 10. $\angle 2$ 12. z 11 115. Find the measure 75 and $m \angle 10 = 16$. 18. $\angle 5$ $\angle L \dots$

Where To Download Skills Practice 3 1 Answers

Lower Moreland Township

School District / Overview

252 Chapter 1 Skills

Practice Lesson 1.1 Skills

Practice page 2 4. Phillip enjoys rock climbing on the weekends. At some of the less challenging locations he can climb upwards of 12 feet per minute. Independent quantity: time (minutes)
Dependent quantity: distance climbed (feet) 5. Jose prefers to walk to work when the weather is nice.

*A Picture Is Worth a
Thousand Words*

Glencoe Algebra 1 Answers

ISBN: 9780078651137. This is a comprehensive textbook that can help the student

Where To Download Skills Practice 3 1 Answers

better understand the entire algebra topic. This textbook can help you understand each and every topic in algebra in a very comprehensive manner. We will help you with an overview of each and every chapter given in Glencoe algebra 1.

Glencoe Algebra 1 Answers - A Plus Topper

Skills Practice Angles and Parallel Lines PERIOD 110 10
12 78 -70 q In the figure,
 $m\angle 2 = 3x + 8$ 1 (0 5.24 In the figure, $m\angle 7 = 7x + 9$ 100 9.28
Y0 11.L5 la) In the figure,
 $m\angle 3 =$ of each angle. 13.0
105 15. 17 $\angle 14$ *tos 70. Find
the measure of each angle.
2.15 6.16 100. Find the

Where To Download Skills Practice 3 1 Answers

measure of each angle, 8. Z6
80

ahodginscc « For all your math needs!

Chapter 4 26 Glencoe Algebra
1 4-4 Skills Practice
Parallel and Perpendicular
Lines Write an equation in
slope-intercept form for the
line that passes through the
given point and is parallel
to the graph of the given
equation. ... $(-2, 3)$, $y = 1$
 $4x - 4$ 18. $(0, 0)$, $y = 1$ 2

*4-4 Skills Practice -
Neshaminy School District*
Chapter 2 PT Practice Skills
Type B Chapter 3 Chapter 4
Chapter 5 Chapter 6 Chapter
7 Chapter 7 PT Practice

Where To Download Skills Practice 3 1 Answers

Skills Chapter 8 Chapter 9
Chapter 10 Practice Final
Final Exam Option A v6.0
Final Exam Option B v6.0
Final Exam Option C v6.0 RSE
Practice Skills Assessment
Part 1 – PT – Option A RSE
Practice Skills Assessment
Part 1 – PT ...

*CCNA 3 v7 Free EXAM ANSWERS
and Skills Exam 2020 - CCNA
v7.0*

Lesson 7-3 Chapter 7 19
Glencoe Algebra 1 7-3 Skills
Practice Rational Exponents
Write each expression in
radical form, or write each
radical in exponential form.
1. $(8x)^{-1} 6^2 \sqrt{\sqrt{8x}}$ 2. $6z$
 $-\sqrt{z}$ 3. $19^{\frac{1}{9}} - 1^{\frac{2}{4}}$ 4. $\sqrt[11]{1}$
1 $-1^{\frac{2}{5}}$ 5. $19^x - 2^{\frac{19}{\sqrt{x}}}$

Where To Download Skills Practice 3 1 Answers

$\sqrt{34}$ 3 4 -1 2 7. $\sqrt{27g}$ (27g)
-1 2 8. 33 gh 1 33 2 $g\sqrt{h}$ 9.
 $\sqrt{13abc}$...

*NAME DATE PERIOD 7-3 Skills
Practice*

These Reading Skills Practice Tests help students prepare for standardized tests. They include engaging informational texts, just like the ones in Scholastic News, and a variety of multiple-choice, short-answer, and essay questions. Download them below. Answer Keys are found at the bottom of the page.

*Reading Skills Practice
Tests | Scholastic News 3
Chapter 5 19 Glencoe Algebra*

Where To Download Skills Practice 3 1 Answers

1 Skills Practice Solving
Multi-Step Inequalities
Justify each indicated step.

1. $-3 < t - 3 \geq -15 \dots$

Sample answer: Let n = the
number. 15 . Four more than
the quotient of a number and
three is at least nine.

Copyright code : 68e186efc38
7ce8f5415fcf557589d50